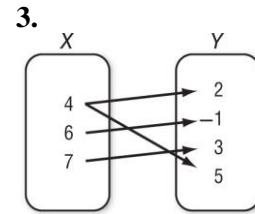
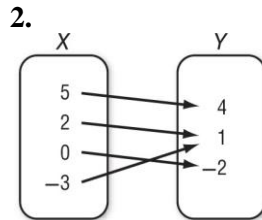
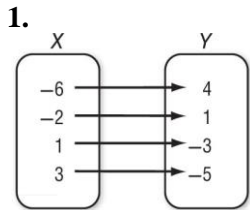


1-7 Skills Practice

Functions

Determine whether each relation is a function.



4.

x	y
4	-5
-1	-10
0	-9
1	-7
9	1

5.

x	y
2	7
5	-3
3	5
-4	-2
5	2

6.

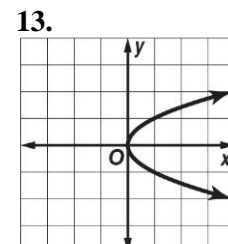
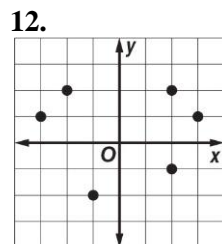
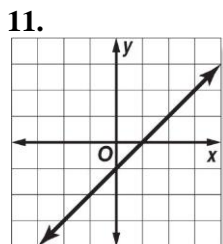
x	y
3	7
-1	1
1	0
3	5
7	3

7. $\{(2, 5), (4, -2), (3, 3), (5, 4), (-2, 5)\}$

8. $\{(6, -1), (-4, 2), (5, 2), (4, 6), (6, 5)\}$

9. $y = 2x - 5$

10. $y = 11$



If $f(x) = 3x + 2$ and $g(x) = x^2 - x$, find each value.

14. $f(4)$

15. $f(8)$

16. $f(-2)$

17. $g(2)$

18. $g(-3)$

19. $g(-6)$

20. $f(2) + 1$

21. $f(1) - 1$

22. $g(2) - 2$

23. $g(-1) + 4$

24. $f(x + 1)$

25. $g(3b)$